



## WORKSHEET-1

CHAPTER:- TIME

CLASS:-III

SUBJECT: Maths

Write the displayed time below each clock:

1)




\_\_\_\_\_

2)



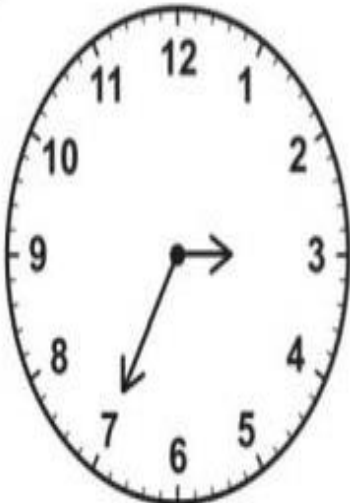
\_\_\_\_\_

3)




\_\_\_\_\_

4)



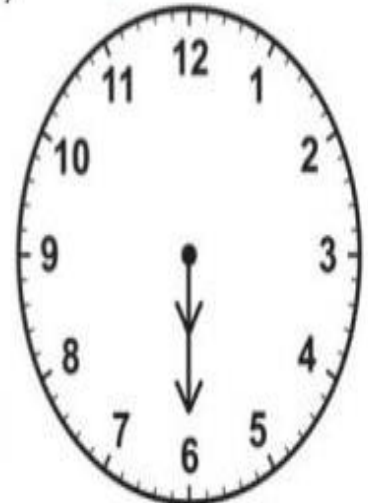
\_\_\_\_\_

5)



\_\_\_\_\_

6)



\_\_\_\_\_



## WORKSHEET-3

CHAPTER:- TIME

CLASS:-III

SUBJECT: Maths

---

Fill in the blanks:

- 1 year = \_\_\_\_\_ months
- January has \_\_\_\_\_ days
- 1000 years = \_\_\_\_\_ millennium
- 1 week = \_\_\_\_\_ days
- 366 days = \_\_\_\_\_
- 365 days = \_\_\_\_\_
- 1 minute = \_\_\_\_\_
- 1 hour = \_\_\_\_\_ minutes
- September has \_\_\_\_\_ days
- November has \_\_\_\_\_ days
- 1 Decade = \_\_\_\_\_ years



## WORKSHEET – 2

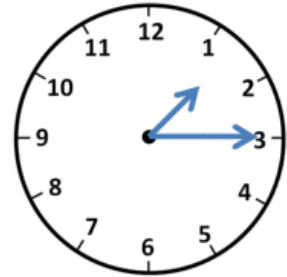
CHAPTER:- TIME  
CLASS:-III

SUBJECT: Maths

Draw lines to match the correct digital time to each clock.



7:40



1:15

6:05



5:10



8:20



10:45