

# GURUKUL INTERNATIONAL SCHOOL, JANJGIR

SESSION: 2024-25


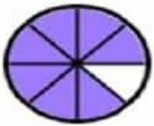
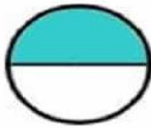
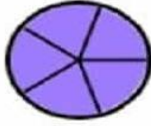
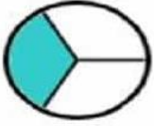
## WORKSHEET

SUBJECT- MATHS

CLASS: III

NAME:

Q 1. Write the fraction :



Q 2. Write the numerator and denominator of the fraction given :

a)  $\frac{5}{6}$       b)  $\frac{7}{10}$

Q 3. Write the fraction name:    a)  $\frac{3}{7}$       b)  $\frac{1}{5}$       c)  $\frac{4}{9}$

Q 4. A group of students has a total of 10 pencils. They give  $\frac{1}{2}$  of the pencils to another group. How many pencils do they give away?

Q 5. Lily has 6 apples. She gave  $\frac{1}{2}$  of the apples to her friend. How many apples did she give?

